

112

112

**FIRST YEAR OF 3-YEAR B.A. (HONS.)
ENTRANCE EXAMINATION, 2018**

CLUSTER—1 (FRENCH, GERMAN,
RUSSIAN AND SPANISH)

[Field of Study Code : FRNU (406)/
GERU (407)/RSNU (408)/SPNU (409)]

Time Allowed : 3 hours

Maximum Marks : 100

INSTRUCTIONS FOR CANDIDATES

- (i) Attempt **all** questions.
- (ii) The Question Paper has two Parts—
Part-A and Part-B.
- (iii) Part—A [Unit—I (42 questions) and
Unit—II (9 questions)] is to be answered
in the ANSWER SHEET (OMR).
- (iv) Part—B (3 questions) is to be answered
in the QUESTION PAPER itself.
- (v) There is no negative marking.
- (vi) Extra pages are provided for Rough
Work at the end of the booklet.

/112-A

**FIRST YEAR OF 3-YEAR B.A. (HONS.)
ENTRANCE EXAMINATION, 2018**

CLUSTER—1 (FRENCH, GERMAN,
RUSSIAN AND SPANISH)

SUBJECT
(Field of Study/Language)

FIELD OF STUDY CODE

NAME OF THE CANDIDATE

REGISTRATION NO.

--	--	--	--	--

CENTRE OF EXAMINATION

DATE

.....
(Signature of Candidate)

.....
(Signature of Invigilator)

.....
(Signature and Seal of
Presiding Officer)

/112-A

ENTRANCE EXAMINATION, 2018

FIRST YEAR OF 3-YEAR B.A. (HONS.)

CLUSTER—1 (FRENCH, GERMAN, RUSSIAN AND SPANISH)

[Field of Study Code : FRNU (406)/GERU (407)/RSNU (408)/SPNU (409)]

Maximum Marks : 100

Time Allowed : 3 hours





















INSTRUCTIONS FOR CANDIDATES

Candidates must read carefully the following instructions before attempting the Question Paper :

- (i) Write your Name and Registration Number in the space provided for the purpose on the first page of this Question Paper and in the Answer Sheet.
- (ii) Attempt **all** questions.
- (iii) The Question Paper has two Parts—Part-A and Part-B.
- (iv) **Part—A [Unit—I (42 questions) and Unit—II [9 questions]] is to be answered in the ANSWER SHEET (OMR).**
- (v) **Part—B (3 questions) is to be answered in the QUESTION PAPER itself.**
- (vi) There is no negative marking.
- (vii) Pages at the end have been provided for Rough Work.
- (viii) Calculators are not allowed.
- (ix) Return the Question Paper and the Answer Sheet (OMR) to the Invigilator at the end of the Entrance Examination. **DO NOT FOLD THE ANSWER SHEET.**

INSTRUCTIONS FOR MARKING ANSWERS

1. Use only Blue/Black Ballpoint Pen (do not use pencil) to darken the appropriate Circle.
2. Please darken the whole Circle.
3. Darken ONLY ONE CIRCLE for each question as shown in example below :

Wrong	Wrong	Wrong	Wrong	Correct
   	   	   	   	   

4. Once marked, no change in the answer is allowed.
5. Please do not make any stray marks on the Answer Sheet.
6. Do rough work only on the pages provided for this purpose.
7. Mark your answer only in the appropriate space against the number corresponding to the question.
8. **Ensure that you have darkened the appropriate Circle of Question Paper Series Code on the Answer Sheet.**

PART—A

(Marks : 60)

UNIT—I

Answer **all** questions

Each question carries 1 mark

1. Here are some words translated from an artificial language.

kamceno means sky blue

cenorax means blue cheese

aplmittl means star bright

Which word could mean 'bright sky'?

- (a) cenokam
- (b) mitlkam
- (c) raxmittl
- (d) aplceno

2. Here are some words translated from an artificial language.

granamelke means big tree

pinimelke means little tree

melkehoon means tree house

Which word could mean 'big house'?

- (a) granahoon
- (b) pinishur
- (c) pinihoon
- (d) melkegrana

3. Here are some words translated from an artificial language.

slar means jump

slary means jumping

slarmend means jumped

Which word could mean 'playing'?

- (a) clargslarend
- (b) clargy
- (c) ellaclarg
- (d) slarmont

4. Here are some words translated from an artificial language.
- plekapaki* means fruitcake
pakishillen means cakewalk
treftalan means buttercup
- Which word could mean 'cupcake'?
- (a) shillenanalan
(b) treftpleka
(c) pakitreft
(d) alanpaki
5. If in a certain code language, 'CHARCOAL' is coded as '45164913' and 'MORALE' is coded as '296137', then how would the word 'ALLOCHRE' be coded in that language?
- (a) 13396875
(b) 16693985
(c) 13394567
(d) 19943785
6. If in a certain code language, 'MONKEY' is coded as 'XDJMNL', then how would 'TIGER' be written in that same code language?
- (a) QDFHSB
(b) SDFHSC
(c) SHFDQD
(d) None of the above

7. Find the odd one out :

- (a) Rigveda
- (b) Atharveda
- (c) Ayurveda
- (d) Samaveda

8. Find the odd one out :

- (a) Swim
- (b) Listen
- (c) Climb
- (d) Run

9. Find the odd one out :

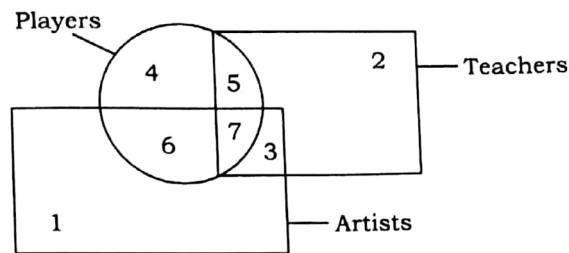
- (a) RAM
- (b) Flash Memory (Pen Drive)
- (c) Hard Disc
- (d) Floppy

10. Find the odd one out :

- (a) Lion
- (b) Zebra
- (c) Tiger
- (d) Crocodile

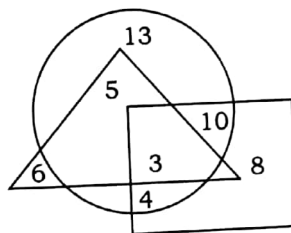
- 11.** Find the odd one out :
- (a) England
 - (b) America
 - (c) Asia
 - (d) Africa
- 12.** If in each number, all the three digits are arranged in ascending order, which of the following will be the lowest number?
- (a) 489
 - (b) 541
 - (c) 654
 - (d) 953
- 13.** Find the missing number :
- 6, 11, 21, 36, 56, ?
- (a) 42
 - (b) 51
 - (c) 81
 - (d) 91
- 14.** If with third, fourth and eleventh letters of the word 'CONTROVERSIAL', a meaningful word can be formed, then its first letter is the answer. If more than one words are possible, then M and if no meaningful words can be formed, then X is the answer.
- (a) N
 - (b) T
 - (c) X
 - (d) M

15. Which numbered space in the figure represents teachers who are players as well as artists?



- (a) 4
(b) 6
(c) 7
(d) None of the above

16. In the following diagram, the square represents women, triangle represents team leaders and circle represents graduate. Which numbered part represents women-graduate-team leaders?



- (a) 3
(b) 5
(c) 8
(d) 13

17. If 15 apples and 20 oranges cost as much as 20 apples and 15 oranges, how do you compare the cost of two?

- (a) Apples are so costly as oranges
(b) Oranges are costly than oranges
(c) Apples are costly than oranges
(d) Nothing can be found from the given data

[P.T.O.

- 18.** An analogue clock always has
- (a) numbers
 - (b) battery
 - (c) alarm
 - (d) needles
- 19.** A book always has
- (a) chapters
 - (b) contents
 - (c) pages
 - (d) pictures
- 20.** Children should avoid smoking because
- (a) it is a bad habit
 - (b) elders advise them not to do so
 - (c) it is an unnecessary expenditure
 - (d) it is injurious to health
- 21.** Which one is the same as emancipate, free and release?
- (a) Ignore
 - (b) Pardon
 - (c) Liberate
 - (d) Quit
- 22.** Find out the word that expresses most effectively the general characteristics of these three words—wheat, barley, rice.
- (a) Food
 - (b) Gram
 - (c) Cereal
 - (d) Agriculture

- 23.** How was France known as?
- (a) Elysium
 - (b) Francia
 - (c) Britannia
 - (d) Gaul
- 24.** Which city is famous for its Film Festival?
- (a) Cannes
 - (b) Grenoble
 - (c) Avignon
 - (d) Paris
- 25.** Which of the following is a river of France?
- (a) Thames
 - (b) Danube
 - (c) Seine
 - (d) Tigris
- 26.** When is Bastille Day?
- (a) July 14
 - (b) January 1
 - (c) July 4
 - (d) October 3
- 27.** Which State of USA was once a French colony?
- (a) Alaska
 - (b) California
 - (c) Louisiana
 - (d) Florida

28. Who won Wimbledon Women's Singles Title in 1991?
- (a) Steffi Graf
 - (b) Monica Seles
 - (c) Gabriela Sabatini
 - (d) Martina Navratilova
29. When did East Germany and West Germany unite?
- (a) 1990
 - (b) 1986
 - (c) 1998
 - (d) 2000
30. Who followed the policy of Blood and Iron?
- (a) Helmut Kohl
 - (b) Konrad Adenauer
 - (c) Führer
 - (d) Otto von Bismark
31. Which was the capital of West Germany?
- (a) Berlin
 - (b) Bonn
 - (c) Vienna
 - (d) Prague
32. Who began reformation in the 16th century?
- (a) Martin Luther
 - (b) Nestorius
 - (c) John Wesley
 - (d) John Calvin

33. Who became the King of Spain in 1975?
- (a) Philip II
 - (b) Jorge III
 - (c) Juan Carlos
 - (d) Alfonso X
34. Which of the following is not a co-official language in Spain?
- (a) Catalan
 - (b) Basque
 - (c) Galician
 - (d) Frisian
35. Which British colony is claimed by Spain?
- (a) Gibraltar
 - (b) Bermuda
 - (c) Ivory Coast
 - (d) Bahamas
36. Mainland Spain is the part of which peninsula?
- (a) Balkan
 - (b) Alaskan
 - (c) Iberian
 - (d) Scandinavian
37. Where was Olympics 1992 (Summer) held?
- (a) Barcelona
 - (b) Paris
 - (c) Athens
 - (d) Madrid

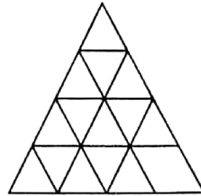
- 38.** Which city is considered as Third Rome?
- (a) St. Petersburg
 - (b) Tula
 - (c) Kiev
 - (d) Moscow
- 39.** Which is the national animal of Russia?
- (a) Cow
 - (b) Lion
 - (c) Bear
 - (d) Tiger
- 40.** What are the colours of Russian Flag?
- (a) Green, red and white
 - (b) White, blue and red
 - (c) Blue and red
 - (d) Red and white
- 41.** Who was awarded the Nobel Prize in literature in 1970?
- (a) Anna Karenina
 - (b) Alexander Solzhenitsyn
 - (c) Andrei Sakharov
 - (d) Vasily Shukshin
- 42.** Which is the highest mountain in Russia?
- (a) Elbrus
 - (b) Krestovski
 - (c) Ushkovski
 - (d) Ostri Tolbachik

UNIT—II

Answer **all** questions

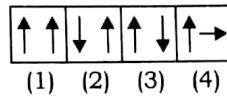
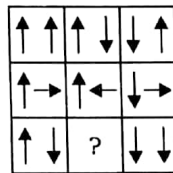
Each question carries 2 marks

- 43.** Find the minimum number of straight lines required to make the given figure :



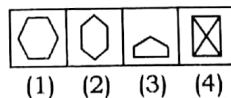
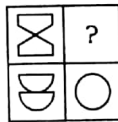
- (a) 9
(b) 11
(c) 15
(d) 16

- 44.** Choose the suitable figure from the four alternatives given below that would complete the figure matrix :



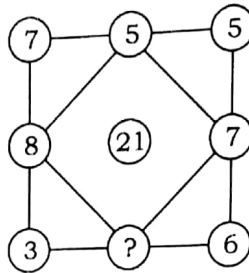
- (a) 1
(b) 2
(c) 3
(d) 4

- 45.** Choose the suitable figure from the four alternatives given below that would complete the figure matrix :



- (a) 1
(b) 2
(c) 3
(d) 4

46. Choose the suitable figure from the four alternatives given below that would complete the figure matrix :



- (a) 3
(b) 5
(c) 1
(d) 2
47. In the following questions, a statement is given, followed by two conclusions. On the basis of the statement, find out which one is the correct conclusion given below :

Statement : All the organised persons find time for rest, Reena in spite of her busy schedule, finds time for rest.

Conclusions :

- I. Reena is an organised person.
II. Reena is a hardworking person.

- (a) Only conclusion I follows
(b) Only conclusion II follows
(c) Either I or II follows
(d) Both I and II follow
48. There are three statements. Based on the first two statements, the third statement may be true, false, or uncertain.

Teena is older than Ramesh.

Nitin is older than Teena.

Ramesh is older than Nitin.

If the first two statements are true, the third statement is

- (a) true
(b) false
(c) uncertain
(d) None of the above

49. There are three statements. Based on the first two statements, the third statement may be true, false, or uncertain.

The temperature on Monday was lower than on Tuesday.

The temperature on Wednesday was lower than on Tuesday.

The temperature on Monday was higher than on Wednesday.

If the first two statements are true, the third statement is

- (a) true
 - (b) false
 - (c) uncertain
 - (d) None of the above
50. Six friends are sitting in a circle and are facing the centre of the circle. Aakansha is between Rahul and Vinod. Mansi is between Kumar and Mohit. Rahul and Kumar are opposite to each other.
- Who is sitting right to Rahul?
- (a) Kumar
 - (b) Aakansha
 - (c) Vinod
 - (d) Mohit
51. Among five students, Mohan is older than Raju but not as old as Lalit. Lalit is older than Neelesh and Kabir. Neelesh is younger than Raju but not the youngest. Who is the fourth in the descending order of age?
- (a) Mohan
 - (b) Raju
 - (c) Kabir
 - (d) None of them

PART—B

(Marks : 40)

Answer **all** questions

2×5=10

- A.** Read the text and answer to the questions given below :

Antarctica is the coldest, driest, highest, windiest, most inaccessible and inhospitable area of the earth's surface. Although it covers one-tenth of the world's land surface, as large as China, Argentina and France. Nigeria and New Zealand combined, the only people on this harsh continent are scientists and the occasional explorers.

Seals and penguins, the only wildlife, inhabit the pack-ice and beaches. Mites, springtails, lice and midges are the main fauna. The only plants are fungi, algae, lichens and mosses.

Shoals of krill, perhaps enough to double the world's fish catch, whales (mostly blue, humpback and fin species) and fish abound in the Antarctic seas.

And by geological analogy, scientists believe that there is a very substantial amount of mineral resources, including gas and oil. Estimates made by the United States Geological Survey several years ago suggest an offshore recoverable resource of 15 billion barrels. Coal and iron ore are also present for exploitation beneath the large repository of ice.

The total volume of ice in Antarctica is 30 million cubic kilometres, about 70 per cent of the world's store of fresh water and 90 per cent of the world's ice. If it all melted, the world's oceans would rise between 45 and 90 metres.

Such is the intriguing promise of unexplored wealth on this continental land mass, which, when developed, may relieve the world's food shortage and energy crisis.

Tick the correct answer :

1. The opening sentence illustrates that Antarctica is
 - (A) an uninhabitable place
 - (B) not worth developing
 - (C) a land of harsh extremes
 - (D) a virgin land

2. Which of the following statements about Antarctica is false?
- (A) It is the home of seals and penguins
 - (B) It is rich in plant life
 - (C) The only people of Antarctica are scientists and explorers
 - (D) It covers 10 per cent of the earth's land surface
3. A significant potential food resource that Antarctica has is
- (A) its plant life
 - (B) its possibility of farming
 - (C) its fauna
 - (D) krill
4. Scientists believe that Antarctica
- (A) is very rich in mineral resources
 - (B) is moderately rich in mineral resources
 - (C) is more rich in gas and oil than anywhere else in the world
 - (D) has coal and iron, but not enough to be mined
5. Many nations are interested in Antarctica because
- (A) it offers a challenge to human initiative
 - (B) it is as yet unexplored
 - (C) it is a no-man's land
 - (D) it is rich in minerals

- B.** Write a short essay (in about 250–300 words) on the topic “Representation of women in Bollywood movies”. 20

c. Describe the picture given below in about 150–200 words :

10

